

Butterflies





Name _____

Let's Make 10






Draw butterflies to make ten. Finish the number model.






$$2 + \underline{\quad} = 10$$



$$4 + \underline{\quad} = 10$$

$$6 + \underline{\quad} = 10$$

$$5 + \underline{\quad} = 10$$

$$2 + \underline{\quad} = 10$$